

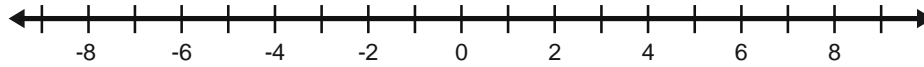
COMPETENCIA: INTERVALO, DESIGUALDADES y PUNTO MEDIO

3. Efectuar las siguientes operaciones, utilizando intervalos

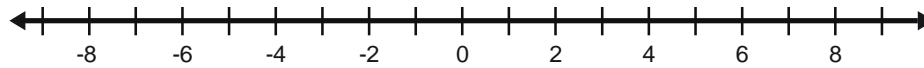
Nota: *Debe utilizar lápiz de colores, para que se puedan observar las respuestas.*

$A = [-5, 3]$ $B = [-2, 7]$ Determine $A \cap B =$ $A \cup B =$ $A - B =$

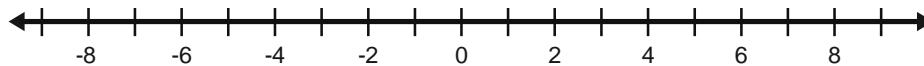
$A \cap B =$



$A \cup B =$

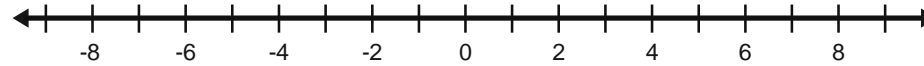


$A - B =$

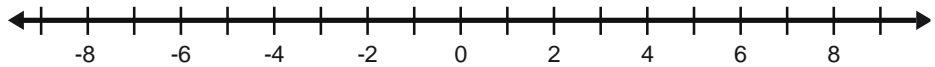


$A = (-6, 4)$ $B = (-4, 6)$ Determine $A \cap B =$ $A \cup B =$ $A - B =$

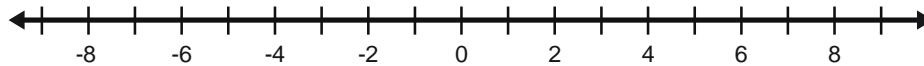
$A \cap B =$



$A \cup B =$

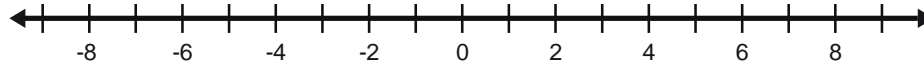


$A - B =$

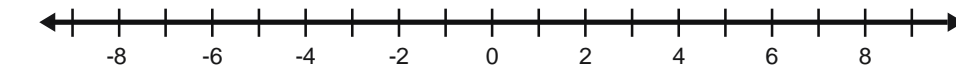


$A = (-5, 4]$ $B = [-2, 8)$ Determine $A \cap B =$ $A \cup B =$ $A - B =$

$A \cap B =$



$A \cup B =$



Los falsos amigos abundan en la abundancia y los buenos amigos escasean en la escasez. Pastor Alberto Ovalle